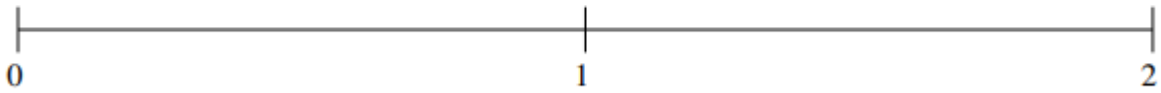


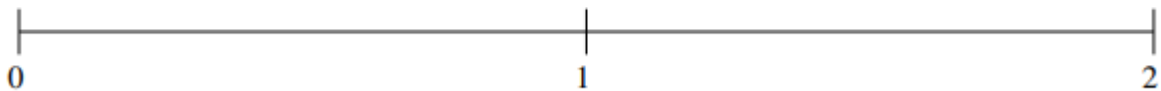
Classification de Fractions (B)

À l'aide des droites numériques, classifiez chaque série de fractions ci-dessous en ordre croissant.

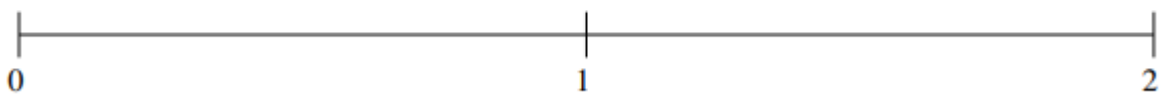
$$1\frac{1}{2}, \frac{1}{10}, 1\frac{1}{5}, \frac{1}{2}, \frac{4}{5}$$



$$\frac{1}{4}, \frac{3}{4}, 1\frac{1}{6}, 1\frac{1}{2}, \frac{1}{2}$$



$$1\frac{1}{2}, \frac{3}{4}, 1\frac{4}{5}, 1\frac{1}{5}, \frac{2}{5}$$



$$1\frac{1}{6}, 1\frac{1}{2}, \frac{2}{3}, 1\frac{5}{6}, \frac{1}{3}$$

