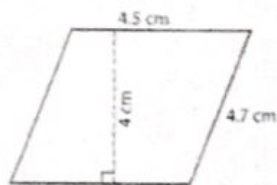
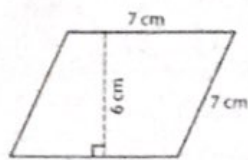


Réponses

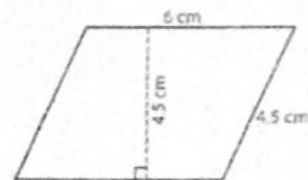
Aire d'un parallélogramme Formule: $b \times h$



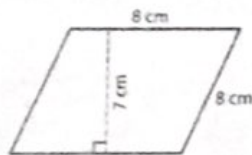
Area: 18 cm^2



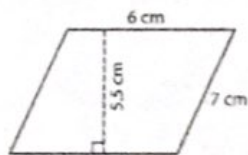
Area: 42 cm^2



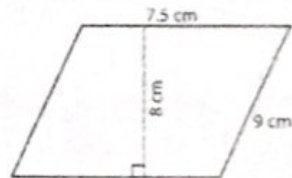
Area: 27 cm^2



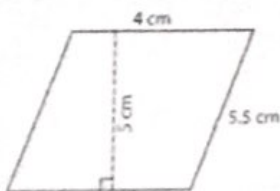
Area: 56 cm^2



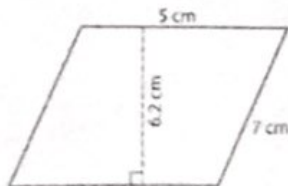
Area: 33 cm^2



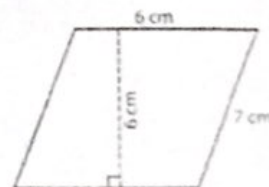
Area: 60 cm^2



Area: 20 cm^2

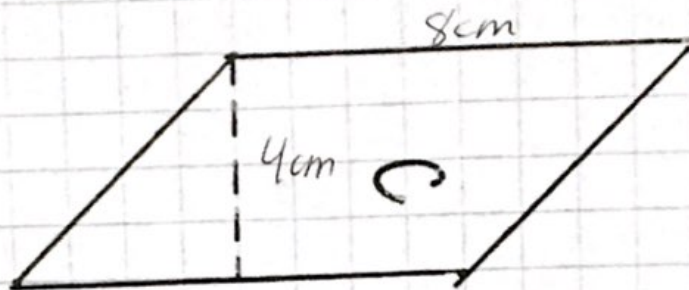


Area: 31 cm^2

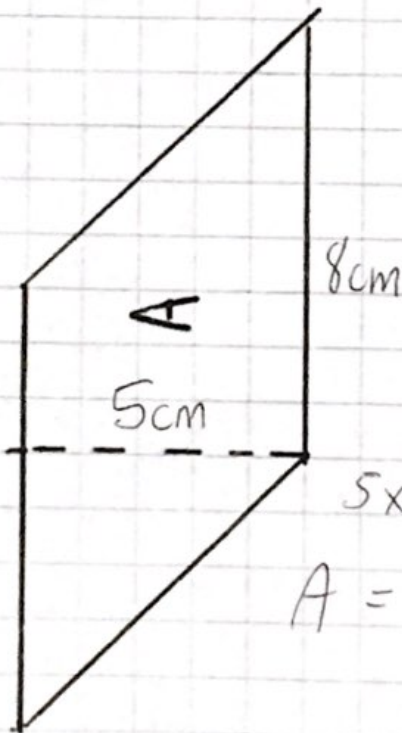


Area: 36 cm^2

Мҗр. 139

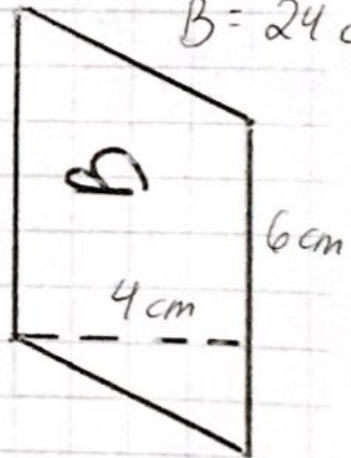


$$8 \times 4 = 32 \text{ cm}^2$$
$$C = 32 \text{ cm}^2$$



$$5 \times 8 = 40 \text{ cm}^2$$

$$A = 40 \text{ cm}^2$$



$$4 \times 6 = 24 \text{ cm}^2$$
$$B = 24 \text{ cm}^2$$