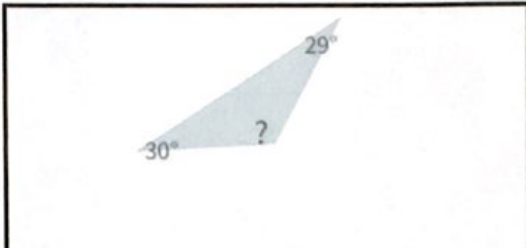
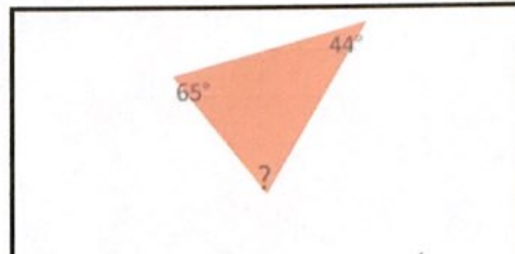


Réponses

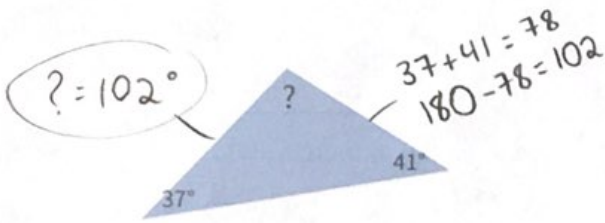
Trouvez la mesure de l'angle manquant dans chaque triangle!



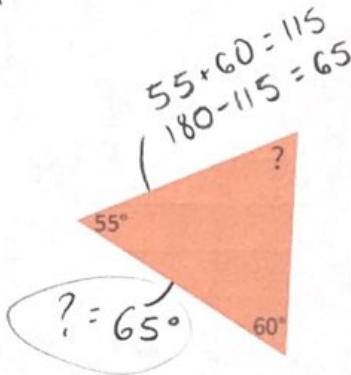
92° 121°
 144° 103°



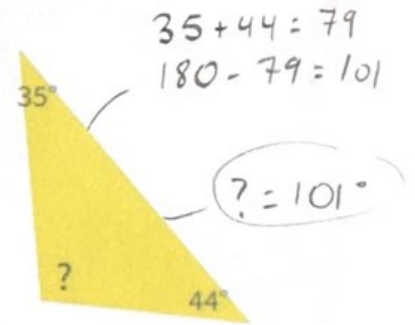
54° 71°
 76° 86°



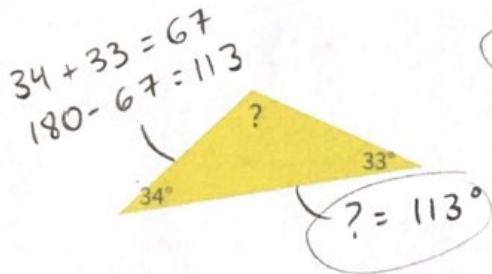
$37 + 41 = 78$
 $180 - 78 = 102$
 $? = 102^\circ$



$55 + 60 = 115$
 $180 - 115 = 65$
 $? = 65^\circ$

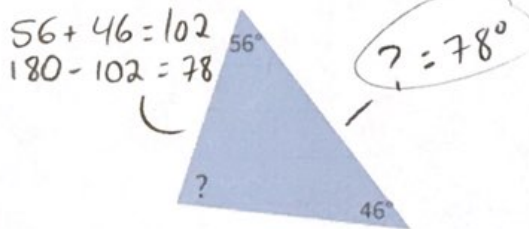


$35 + 44 = 79$
 $180 - 79 = 101$
 $? = 101^\circ$

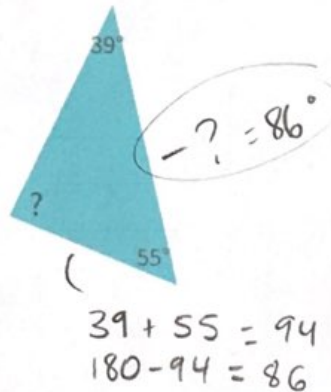


$34 + 33 = 67$
 $180 - 67 = 113$
 $? = 113^\circ$

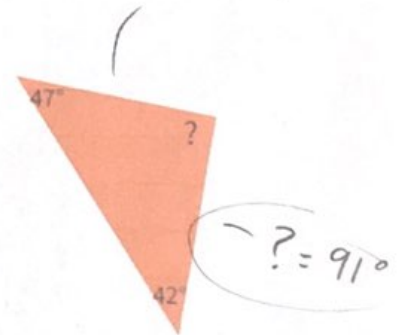
$47 + 42 = 89$
 $180 - 89 = 91$



$56 + 46 = 102$
 $180 - 102 = 78$
 $? = 78^\circ$



$39 + 55 = 94$
 $180 - 94 = 86$
 $? = 86^\circ$



$? = 91^\circ$