



Réponses!

Trouvez la mesure de l'angle manquant dans chaque quadrilatère!

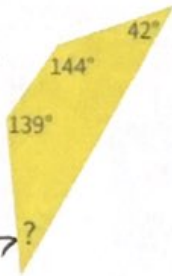


70° 96°
 80° 109°

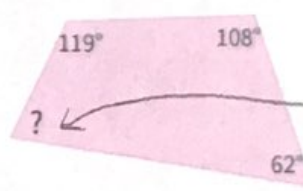


61° 69°
 50° 83°

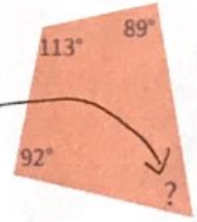
$139 + 144 + 42 = 325$
 $360 - 325 = 35^\circ$



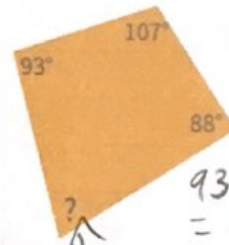
$119 + 108 + 62 = 289$
 $360 - 289 = 71^\circ$




$113 + 89 + 92 = 294$
 $360 - 294 = 66^\circ$



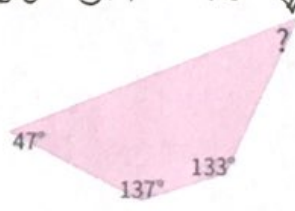
$93 + 107 + 88 = 288$
 $360 - 288 = 72^\circ$



$53 + 130 + 128 = 311$
 $360 - 311 = 49^\circ$



$47 + 137 + 133 = 317$
 $360 - 317 = 43^\circ$



$102 + 104 + 78 = 284$
 $360 - 284 = 76^\circ$

