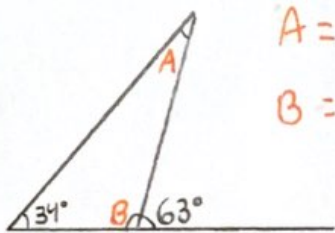
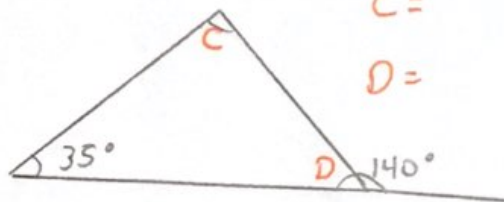


Trouve les angles manquants dans les triangles et les quadrilatères!

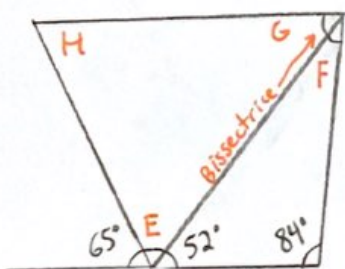
NOM: _____



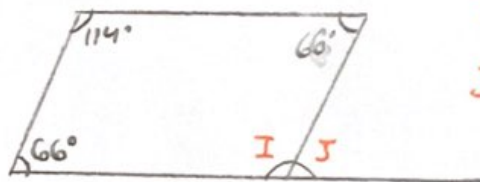
A =
B =



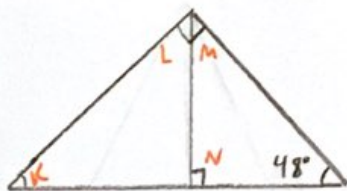
C =
D =



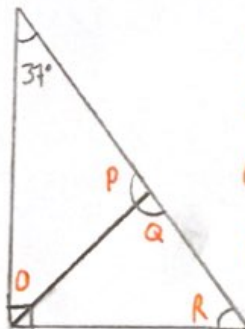
E =
F =
G =
H =



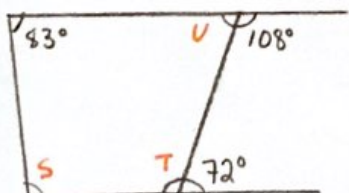
I =
J =



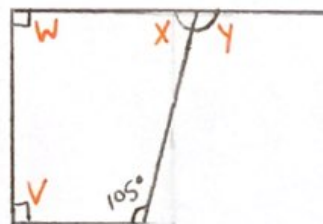
K =
L =
M =
N =



O =
P =
Q =
R =



S =
T =
U =



V =
W =
X =
Y =