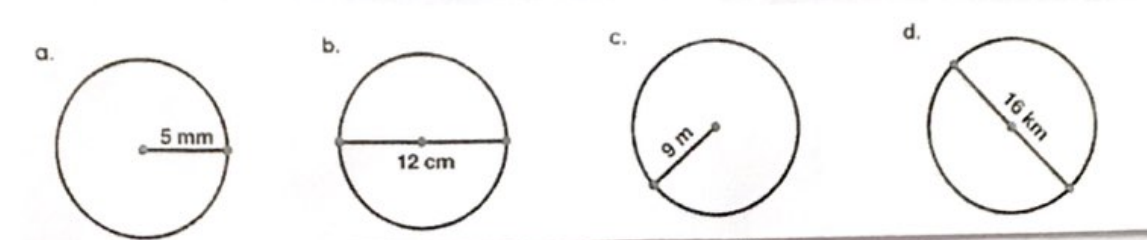


Mesurer le rayon, le diamètre et la circonférence !

NOM: _____

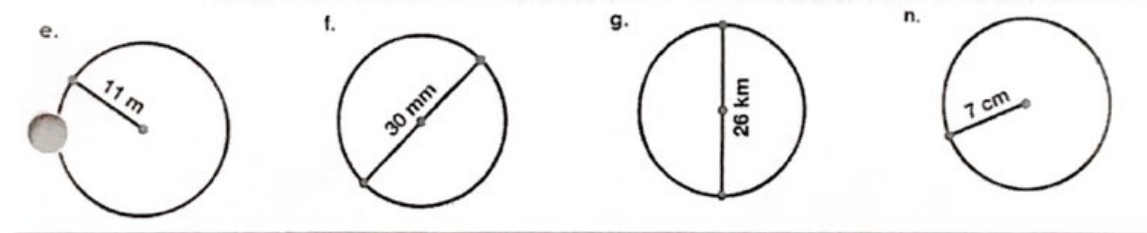


R _____
D _____
C _____

R _____
D _____
C _____

R _____
D _____
C _____

R _____
D _____
C _____

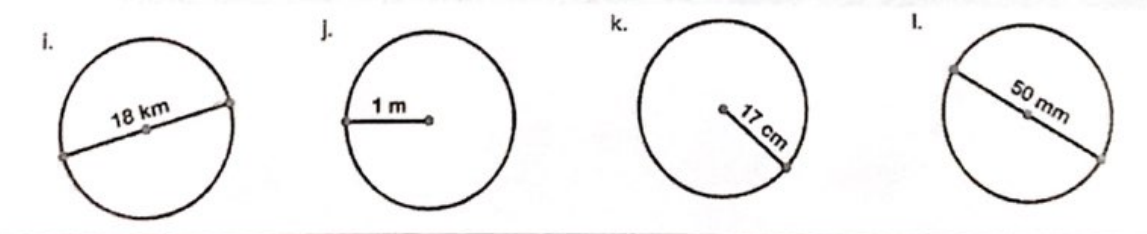


R _____
D _____
C _____

R _____
D _____
C _____

R _____
D _____
C _____

R _____
D _____
C _____



R _____
D _____
C _____

R _____
D _____
C _____

R _____
D _____
C _____

R _____
D _____
C _____