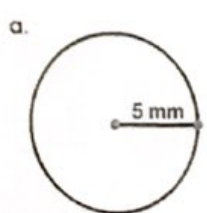


Mesurer le rayon, le diamètre et la circonférence !

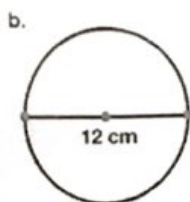
$$C = \pi D$$

RÉPONSES

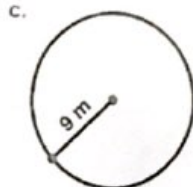
NOM:
Mme Leclair



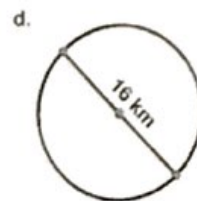
R 5 mm
D 10 mm
C 31,42 mm



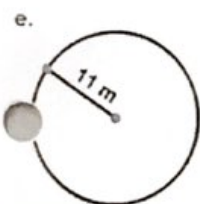
R 6 cm
D 12 cm
C 37,70 cm



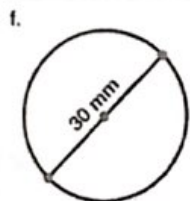
R 9 m
D 18 m
C 56,55 m



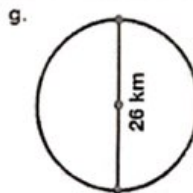
R 8 km
D 16 km
C 50,27 km



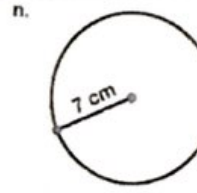
R 11 m
D 22 m
C 69,12 m



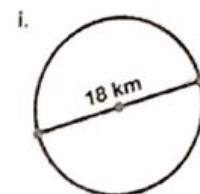
R 15 mm
D 30 mm
C 94,25 mm



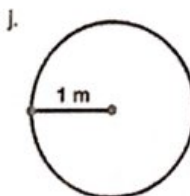
R 13 km
D 26 km
C 81,68 km



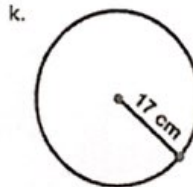
R 7 cm
D 14 cm
C 43,98 cm



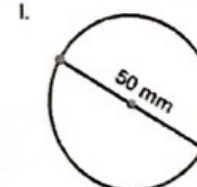
R 9 km
D 18 km
C 56,55 km



R 1 m
D 2 m
C 6,28 m



R 17 cm
D 34 cm
C 106,81 cm



R 25 mm
D 50 mm
C 157,08 mm